


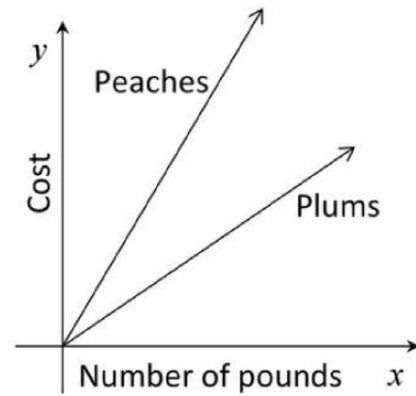
Workout



By the Pound

Cherries cost more by the pound than peaches or plums.

1. Draw a line on the graph used for peaches and plums to represent the cost of cherries by the pound. Remember, **cherries cost more** by the pound than peaches or plums.



2. Describe in writing what you notice in this graph about the cost of cherries, peaches, and plums.




¹ **Inspiration for Task:** By the Pound tasks and challenge have been adapted from Illustrative Mathematics materials, particularly [Peaches & Plums](#) and [Coffee by the Pound](#) tasks originally accessed on 5/1/2014, and are licensed by [Illustrative Mathematics](#) under [CC BY-NC-SA 4.0](#).

Check Your Pulse

Compare your answers with a partner. Discuss where you agree or disagree.

1. In a few words, explain what part(s) were difficult for you?

Circle the thumb that best describes how you are feeling:

	I have lots of questions, I need help. 	Almost got it, but need practice. 	Got it. I can explain this to a classmate. 
--	--	--	--

¹ **Inspiration for Task:** By the Pound tasks and challenge have been adapted from Illustrative Mathematics materials, particularly [Peaches & Plums](#) and [Coffee by the Pound](#) tasks originally accessed on 5/1/2014, and are licensed by [Illustrative Mathematics](#) under [CC BY-NC-SA 4.0](#).